

Centre Number	Candidate Number	Name
---------------	------------------	------

UNIVERSITY OF CAMBRIDGE INTERNATIONAL EXAMINATIONS
General Certificate of Education Ordinary Level

CHEMISTRY

5070/02

Paper 2 Theory

May/June 2005

1 hour 30 minutes

Candidates answer on the Question Paper.

Additional Materials: Answer Paper

READ THESE INSTRUCTIONS FIRST

Write your Centre number, candidate number and name on all the work you hand in.

Write in blue or black pen.

Do not use staples, paper clips, highlighters, glue or correction fluid.

You may use a calculator.

Sections A

Answer **all** questions.

Write your answers in the spaces provided on the Question Paper.

Section B

Answer any **three** questions.

Write your answers on any lined pages and/or separate answer paper.

At the end of the examination, fasten all your work securely together.

The number of marks is given in brackets [] at the end of each question or part question.

A copy of the Periodic Table is printed on page 16.

For Examiner's Use	
Section A	
B7	
B8	
B9	
B10	
Total	

This document consists of **13** printed pages and **3** lined pages.



Section A

Answer **all** the questions in this section in the spaces provided.

The total mark for this section is 45.

A1 Choose from the following substances to answer the questions below.

aluminium oxide
ammonia
barium sulphate
calcium carbonate
carbon monoxide
lead(II) iodide
nitrogen dioxide
silicon dioxide

Each substance can be used once, more than once or not at all.

Name a substance which

(a) is a gas that causes acid rain,

.....[1]

(b) has a giant molecular structure,

.....[1]

(c) is amphoteric,

.....[1]

(d) is an insoluble yellow solid.

.....[1]

A2 Iron is one of the most important metals. It is a transition element.
Most iron is used in the alloy steel.

(a) Explain, in terms of metallic bonding, why iron is a good electrical conductor.

.....
.....
.....[2]

(b) Describe how different proportions of carbon can modify the physical properties of steel.

.....
.....
.....[2]

(c) When underwater, iron pipes will rust relatively rapidly.

(i) State the essential conditions needed for the rusting of iron.

.....

(ii) Pieces of magnesium are often attached to underwater iron pipes. Explain how the magnesium protects the iron pipes against rusting.

.....
.....
.....[3]

(d) Write **two** typical properties that are generally common **only** to transition elements.

1.
2.[2]

(e) A sample of a compound of iron is analysed. The sample contains 0.547 g of potassium, 0.195 g of iron, 0.252 g of carbon and 0.294 g of nitrogen.
Calculate the empirical formula of this compound.

Answer[3]

A3 This question is about the Periodic Table.

The diagram below shows part of the original Periodic Table first published by Mendeleev in 1869.

	Period 1	Period 2	Period 3	Period 4		Period 5	
Group 1	H	Li	Na	K	Cu	Rb	Ag
Group 2		Be	Mg	Ca	Zn	Sr	Cd
Group 3		B	Al	*	*	Y	In
Group 4		C	Si	Ti	*	Zr	Sn
Group 5		N	P	V	As	Nb	Sb
Group 6		O	S	Cr	Se	Mo	Te
Group 7		F	Cl	Mn	Br	*	I

The asterisks (*) show gaps in the table that Mendeleev deliberately left.

(a) Which group of elements in a modern Periodic Table is missing from Mendeleev's Periodic Table?

.....[1]

(b) Write two **other** differences between Mendeleev's original table and a modern Periodic Table.

.....

[2]

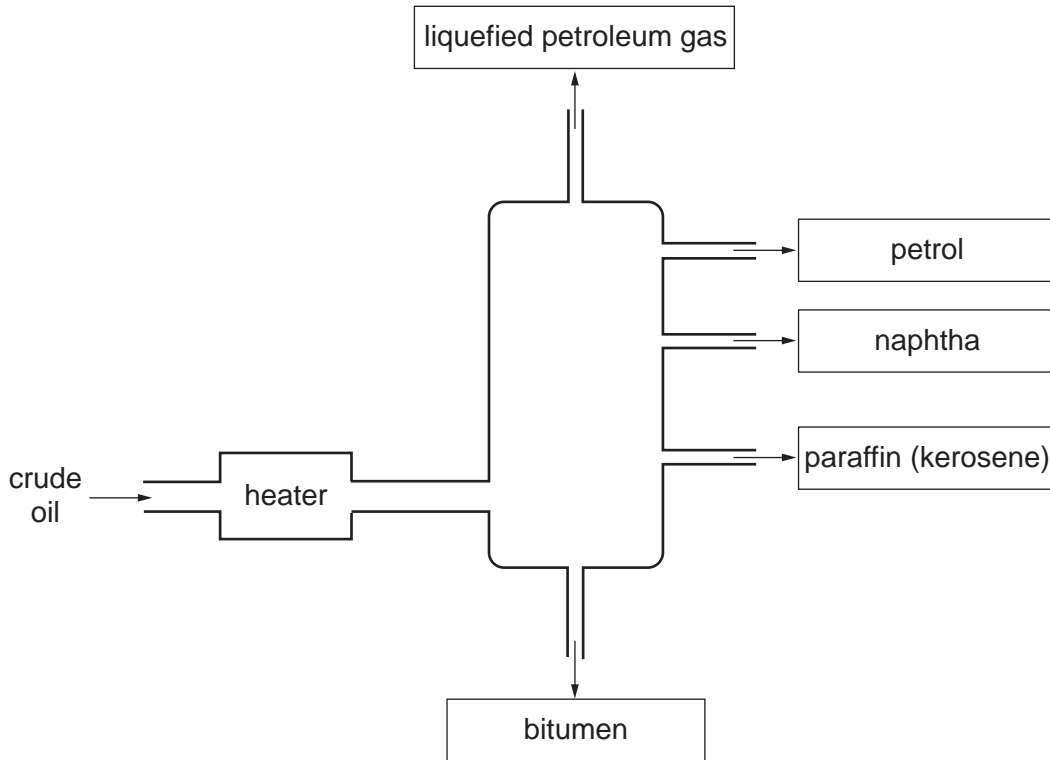
(c) Find rubidium, Rb, in the Periodic Table provided on page 16.
 Predict the reaction between rubidium and cold water.
 Include observations and the chemical equation.

.....

[3]

A4 Petroleum is a mixture of hydrocarbons. In an oil refinery it is separated into fractions by fractional distillation.

The diagram shows a fractionating column and some of the fractions obtained from petroleum.



(a) State the physical property on which the separation depends.

.....[1]

(b) (i) State **one** use for the naphtha fraction.

.....

(ii) State **one** use for the bitumen fraction.

.....

[2]

(c) The liquefied petroleum gas fraction contains the saturated hydrocarbons methane, CH_4 , and ethane, C_2H_6 .

(i) What is the meaning of the term *saturated hydrocarbon*?

.....

.....

- (ii) Draw a 'dot and cross' diagram to show the bonding in methane. You only need to draw the outer electrons of carbon.

[4]

- (d) Describe the importance of cracking in the oil refining process.

.....

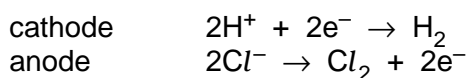
[2]

A5 Chlorine, hydrogen and sodium hydroxide are made by the electrolysis of concentrated aqueous sodium chloride.

- (a) Aqueous sodium chloride contains the following ions, Na^+ , H^+ , OH^- and Cl^- .

Concentrated aqueous sodium chloride can be electrolysed using inert electrodes.

The electrode reactions are represented below.



- (i) Explain why hydrogen, **not** sodium, is formed at the cathode.

.....

- (ii) Suggest why, as the electrolysis proceeds, the concentration of sodium hydroxide in the electrolyte increases.

.....

[2]

(b) Describe a chemical test for each of the gases produced during the electrolysis of concentrated aqueous sodium chloride.

(i) chlorine

.....
.....

(ii) hydrogen

.....
.....

[2]

(c) Describe the use of chlorine in the purification of water.

.....
.....[1]

(d) Describe an advantage of using hydrogen as a possible fuel in the future.

.....
.....[1]

(e) Name the products, if any, of the reaction of chlorine with

(i) aqueous potassium fluoride,

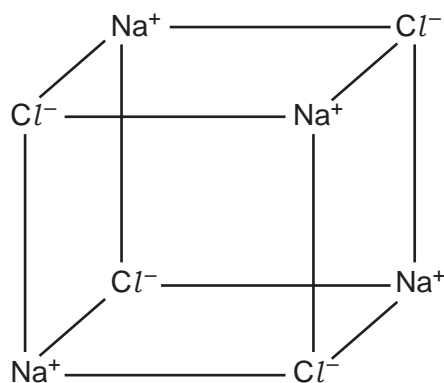
.....

(ii) aqueous sodium bromide.

.....

[2]

A6 The structure of sodium chloride is drawn below.



- (a)** Sodium chloride is an ionic solid.
Draw the electronic structure of both a sodium ion and a chloride ion.

sodium ion

chloride ion

[2]

- (b)** Sodium chloride has a melting point of about 800 °C.

- (i)** Explain why sodium chloride has a high melting point.

.....

.....

.....

- (ii)** Magnesium oxide, MgO, has a similar structure to sodium chloride. Suggest why the melting point of magnesium oxide is higher than that of sodium chloride.

.....

.....

[3]

- (c)** Explain why solid sodium chloride will not conduct electricity but molten sodium chloride will.

.....

..... [1]

Section B

Answer **three** questions from this section.

The total mark for this section is 30.

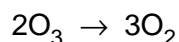
B7 Ozone, O₃, is an atmospheric pollutant in the lower atmosphere but is beneficial higher up in the atmosphere.

(a) How is ozone formed in the lower atmosphere? [1]

(b) Ozone in the upper atmosphere is being depleted. Describe briefly how this is happening and some of the health problems caused by ozone depletion. [3]

(c) At room temperature ozone decomposes slowly to form oxygen, O₂.

The decomposition can be represented by the equation below. The reaction is exothermic. One mole of ozone will release 143 kJ when it is fully decomposed.



(i) In terms of the energy changes that take place during bond breaking and bond making, explain why this reaction is exothermic.

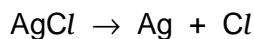
(ii) Explain why the **rate** of this decomposition increases as the **temperature** increases.

(iii) Calculate the energy released when 16 g of ozone is decomposed. [6]

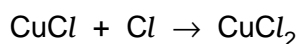
- B8** Sunglasses can be made from photochromic glass. When bright light strikes photochromic glass it darkens.

Photochromic glass contains small amounts of silver chloride, AgCl , and copper(I) chloride, CuCl .

In the presence of bright light, silver chloride decomposes into silver atoms which make the glass go dark, and into chlorine atoms.



Chlorine atoms immediately react with copper(I) chloride to make copper(II) chloride.



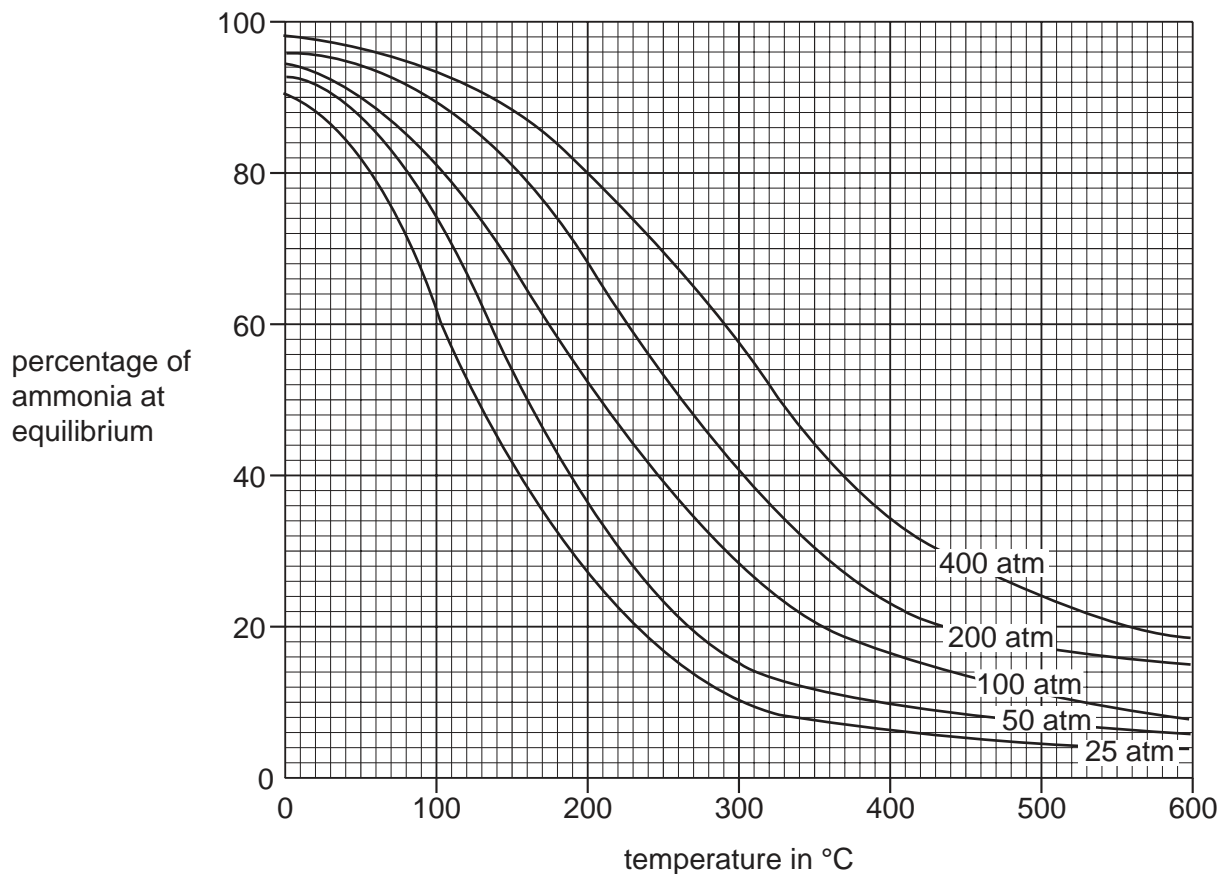
When the exposure to bright light ends, silver atoms reduce copper(II) chloride back into copper(I) chloride and silver chloride.

- (a) Calculate the maximum mass of silver that can be formed when 0.287 g of silver chloride decomposes. [2]
- (b) Explain why the reaction between copper(I) chloride and chlorine involves both oxidation and reduction. [3]
- (c) Construct the equation for the reaction between silver and copper(II) chloride. [1]
- (d) Aqueous copper(II) chloride reacts with aqueous sodium hydroxide to form a precipitate.
- (i) Write the ionic equation, including state symbols, for the precipitation reaction.
- (ii) What is the name and colour of the precipitate?

[4]

B9 Ammonia is manufactured by the Haber process. Ammonia is used to manufacture nitrogenous fertilisers such as ammonium nitrate.

(a) The graphs below give information about the percentage of ammonia present in the equilibrium mixture at different temperatures and pressures.



The reaction requires the use of a catalyst, which operates most efficiently within the temperature range 280 – 450 °C.

- (i) Name the catalyst used in the Haber process.
- (ii) Write a balanced equation for the formation of ammonia in the Haber process.
- (iii) Which conditions of temperature and pressure give the highest percentage of ammonia at equilibrium within the catalyst operating temperature range?
- (iv) Suggest why the normal working temperature used in the Haber process is often over 400 °C.

[5]

(b) Describe and explain the effect of a catalyst on the rate of a reaction. Explain how the use of a catalyst can reduce the overall energy requirement for the Haber process.

[3]

(c) A farmer spreads a fertiliser containing ammonium nitrate onto his land. The farmer then spreads calcium hydroxide on his land to reduce its acidity.

Write an equation for the reaction between ammonium nitrate and calcium hydroxide. Use this equation to explain why the nitrogen content of the fertiliser will be lowered. [2]

DATA SHEET
The Periodic Table of the Elements

		Group																																																																																																																																																																																																																																																																																																																
		I	II	III	IV	V	VI	VII	0																																																																																																																																																																																																																																																																																																									
7 Li Lithium 3	9 Be Beryllium 4	<table border="1" style="width: 100%; border-collapse: collapse; text-align: center;"> <tr> <td style="text-align: center;">1 H Hydrogen 1</td> <td colspan="10"></td> </tr> </table>										1 H Hydrogen 1											4 He Helium 2																																																																																																																																																																																																																																																																																											
1 H Hydrogen 1																																																																																																																																																																																																																																																																																																																		
23 Na Sodium 11	24 Mg Magnesium 12	11 B Boron 5	12 C Carbon 6	13 Al Aluminium 13	14 N Nitrogen 7	15 P Phosphorus 15	16 O Oxygen 8	17 F Fluorine 9	18 Ar Argon 18	19 Ne Neon 10	20 Sc Scandium 21	21 Ti Titanium 22	22 V Vanadium 23	23 Cr Chromium 24	24 Mn Manganese 25	25 Fe Iron 26	26 Ni Nickel 28	27 Co Cobalt 27	28 Cu Copper 29	29 Zn Zinc 30	30 Ga Gallium 31	31 Ge Germanium 32	32 As Arsenic 33	33 Se Selenium 34	34 Br Bromine 35	35 K Potassium 19	36 Ca Calcium 20	37 Kr Krypton 36																																																																																																																																																																																																																																																																																						
39 K Potassium 19	40 Ca Calcium 20	39 Rb Rubidium 37	85 Sr Strontium 38	87 Y Yttrium 39	88 Zr Zirconium 40	89 Nb Niobium 41	90 Mo Molybdenum 42	91 Tc Technetium 43	92 Ru Ruthenium 44	93 Rh Rhodium 45	94 Pd Palladium 46	95 Ag Silver 47	96 Cd Cadmium 48	97 In Indium 49	98 Sn Tin 50	99 Sb Antimony 51	100 Te Tellurium 52	101 I Iodine 53	102 Xe Xenon 54	103 Cs Caesium 55	104 Ba Barium 56	105 La Lanthanum 57	106 Hf Hafnium 72	107 Ta Tantalum 73	108 W Tungsten 74	109 Re Rhenium 75	110 Os Osmium 76	111 Ir Iridium 77	112 Pt Platinum 78	113 Au Gold 79	114 Hg Mercury 80	115 Tl Thallium 81	116 Pb Lead 82	117 Bi Bismuth 83	118 Po Polonium 84	119 At Astatine 85	120 Rn Radon 86																																																																																																																																																																																																																																																																													
133 Cs Caesium 55	137 Ba Barium 56	138 Fr Francium 87	226 Ra Radium 88	227 Ac Actinium 89	139 La Lanthanum 57	140 Ce Cerium 58	141 Pr Praseodymium 59	142 Nd Neodymium 60	143 Pm Promethium 61	144 Sm Samarium 62	145 Eu Europium 63	146 Gd Gadolinium 64	147 Tb Terbium 65	148 Dy Dysprosium 66	149 Ho Holmium 67	150 Er Erbium 68	151 Tm Thulium 69	152 Yb Ytterbium 70	153 Lu Lutetium 71	154 Fr Francium 87	155 Ra Radium 88	156 La Lanthanum 57	157 Ce Cerium 58	158 Pr Praseodymium 59	159 Nd Neodymium 60	160 Pm Promethium 61	161 Sm Samarium 62	162 Eu Europium 63	163 Gd Gadolinium 64	164 Tb Terbium 65	165 Dy Dysprosium 66	166 Ho Holmium 67	167 Er Erbium 68	168 Tm Thulium 69	169 Yb Ytterbium 70	170 Lu Lutetium 71	171 Fr Francium 87	172 Ra Radium 88	173 La Lanthanum 57	174 Ce Cerium 58	175 Pr Praseodymium 59	176 Nd Neodymium 60	177 Pm Promethium 61	178 Sm Samarium 62	179 Eu Europium 63	180 Gd Gadolinium 64	181 Tb Terbium 65	182 Dy Dysprosium 66	183 Ho Holmium 67	184 Er Erbium 68	185 Tm Thulium 69	186 Yb Ytterbium 70	187 Lu Lutetium 71	188 Fr Francium 87	189 Ra Radium 88	190 La Lanthanum 57	191 Ce Cerium 58	192 Pr Praseodymium 59	193 Nd Neodymium 60	194 Pm Promethium 61	195 Sm Samarium 62	196 Eu Europium 63	197 Gd Gadolinium 64	198 Tb Terbium 65	199 Dy Dysprosium 66	200 Ho Holmium 67	201 Er Erbium 68	202 Tm Thulium 69	203 Yb Ytterbium 70	204 Lu Lutetium 71	205 Fr Francium 87	206 Ra Radium 88	207 La Lanthanum 57	208 Ce Cerium 58	209 Pr Praseodymium 59	210 Nd Neodymium 60	211 Pm Promethium 61	212 Sm Samarium 62	213 Eu Europium 63	214 Gd Gadolinium 64	215 Tb Terbium 65	216 Dy Dysprosium 66	217 Ho Holmium 67	218 Er Erbium 68	219 Tm Thulium 69	220 Yb Ytterbium 70	221 Lu Lutetium 71	222 Fr Francium 87	223 Ra Radium 88	224 La Lanthanum 57	225 Ce Cerium 58	226 Pr Praseodymium 59	227 Nd Neodymium 60	228 Pm Promethium 61	229 Sm Samarium 62	230 Eu Europium 63	231 Gd Gadolinium 64	232 Tb Terbium 65	233 Dy Dysprosium 66	234 Ho Holmium 67	235 Er Erbium 68	236 Tm Thulium 69	237 Yb Ytterbium 70	238 Lu Lutetium 71	239 Fr Francium 87	240 Ra Radium 88	241 La Lanthanum 57	242 Ce Cerium 58	243 Pr Praseodymium 59	244 Nd Neodymium 60	245 Pm Promethium 61	246 Sm Samarium 62	247 Eu Europium 63	248 Gd Gadolinium 64	249 Tb Terbium 65	250 Dy Dysprosium 66	251 Ho Holmium 67	252 Er Erbium 68	253 Tm Thulium 69	254 Yb Ytterbium 70	255 Lu Lutetium 71	256 Fr Francium 87	257 Ra Radium 88	258 La Lanthanum 57	259 Ce Cerium 58	260 Pr Praseodymium 59	261 Nd Neodymium 60	262 Pm Promethium 61	263 Sm Samarium 62	264 Eu Europium 63	265 Gd Gadolinium 64	266 Tb Terbium 65	267 Dy Dysprosium 66	268 Ho Holmium 67	269 Er Erbium 68	270 Tm Thulium 69	271 Yb Ytterbium 70	272 Lu Lutetium 71	273 Fr Francium 87	274 Ra Radium 88	275 La Lanthanum 57	276 Ce Cerium 58	277 Pr Praseodymium 59	278 Nd Neodymium 60	279 Pm Promethium 61	280 Sm Samarium 62	281 Eu Europium 63	282 Gd Gadolinium 64	283 Tb Terbium 65	284 Dy Dysprosium 66	285 Ho Holmium 67	286 Er Erbium 68	287 Tm Thulium 69	288 Yb Ytterbium 70	289 Lu Lutetium 71	290 Fr Francium 87	291 Ra Radium 88	292 La Lanthanum 57	293 Ce Cerium 58	294 Pr Praseodymium 59	295 Nd Neodymium 60	296 Pm Promethium 61	297 Sm Samarium 62	298 Eu Europium 63	299 Gd Gadolinium 64	300 Tb Terbium 65	301 Dy Dysprosium 66	302 Ho Holmium 67	303 Er Erbium 68	304 Tm Thulium 69	305 Yb Ytterbium 70	306 Lu Lutetium 71	307 Fr Francium 87	308 Ra Radium 88	309 La Lanthanum 57	310 Ce Cerium 58	311 Pr Praseodymium 59	312 Nd Neodymium 60	313 Pm Promethium 61	314 Sm Samarium 62	315 Eu Europium 63	316 Gd Gadolinium 64	317 Tb Terbium 65	318 Dy Dysprosium 66	319 Ho Holmium 67	320 Er Erbium 68	321 Tm Thulium 69	322 Yb Ytterbium 70	323 Lu Lutetium 71	324 Fr Francium 87	325 Ra Radium 88	326 La Lanthanum 57	327 Ce Cerium 58	328 Pr Praseodymium 59	329 Nd Neodymium 60	330 Pm Promethium 61	331 Sm Samarium 62	332 Eu Europium 63	333 Gd Gadolinium 64	334 Tb Terbium 65	335 Dy Dysprosium 66	336 Ho Holmium 67	337 Er Erbium 68	338 Tm Thulium 69	339 Yb Ytterbium 70	340 Lu Lutetium 71	341 Fr Francium 87	342 Ra Radium 88	343 La Lanthanum 57	344 Ce Cerium 58	345 Pr Praseodymium 59	346 Nd Neodymium 60	347 Pm Promethium 61	348 Sm Samarium 62	349 Eu Europium 63	350 Gd Gadolinium 64	351 Tb Terbium 65	352 Dy Dysprosium 66	353 Ho Holmium 67	354 Er Erbium 68	355 Tm Thulium 69	356 Yb Ytterbium 70	357 Lu Lutetium 71	358 Fr Francium 87	359 Ra Radium 88	360 La Lanthanum 57	361 Ce Cerium 58	362 Pr Praseodymium 59	363 Nd Neodymium 60	364 Pm Promethium 61	365 Sm Samarium 62	366 Eu Europium 63	367 Gd Gadolinium 64	368 Tb Terbium 65	369 Dy Dysprosium 66	370 Ho Holmium 67	371 Er Erbium 68	372 Tm Thulium 69	373 Yb Ytterbium 70	374 Lu Lutetium 71	375 Fr Francium 87	376 Ra Radium 88	377 La Lanthanum 57	378 Ce Cerium 58	379 Pr Praseodymium 59	380 Nd Neodymium 60	381 Pm Promethium 61	382 Sm Samarium 62	383 Eu Europium 63	384 Gd Gadolinium 64	385 Tb Terbium 65	386 Dy Dysprosium 66	387 Ho Holmium 67	388 Er Erbium 68	389 Tm Thulium 69	390 Yb Ytterbium 70	391 Lu Lutetium 71	392 Fr Francium 87	393 Ra Radium 88	394 La Lanthanum 57	395 Ce Cerium 58	396 Pr Praseodymium 59	397 Nd Neodymium 60	398 Pm Promethium 61	399 Sm Samarium 62	400 Eu Europium 63	401 Gd Gadolinium 64	402 Tb Terbium 65	403 Dy Dysprosium 66	404 Ho Holmium 67	405 Er Erbium 68	406 Tm Thulium 69	407 Yb Ytterbium 70	408 Lu Lutetium 71	409 Fr Francium 87	410 Ra Radium 88	411 La Lanthanum 57	412 Ce Cerium 58	413 Pr Praseodymium 59	414 Nd Neodymium 60	415 Pm Promethium 61	416 Sm Samarium 62	417 Eu Europium 63	418 Gd Gadolinium 64	419 Tb Terbium 65	420 Dy Dysprosium 66	421 Ho Holmium 67	422 Er Erbium 68	423 Tm Thulium 69	424 Yb Ytterbium 70	425 Lu Lutetium 71	426 Fr Francium 87	427 Ra Radium 88	428 La Lanthanum 57	429 Ce Cerium 58	430 Pr Praseodymium 59	431 Nd Neodymium 60	432 Pm Promethium 61	433 Sm Samarium 62	434 Eu Europium 63	435 Gd Gadolinium 64	436 Tb Terbium 65	437 Dy Dysprosium 66	438 Ho Holmium 67	439 Er Erbium 68	440 Tm Thulium 69